

Assessments for Meet Michigan

Includes chapter reviews, chapter tests and answers
Social Studies GLCEs are listed for each test question
Each test has been designed for 3rd grade reading level

Developed by David B. McConnell
with thanks to those teachers who have
contributed ideas and comments

© 2009 by Hillsdale Educational Publishers
May be reproduced for use in one classroom

ISBN 978-1-931466-14-1

Hillsdale Educational Publishers, Inc.

39 North Street
Hillsdale, MI 49242

517-437-3179
fax 517-437-0531
e-mail davestory@aol.com
www.hillsdalepublishers.com



Version 2
Chapters 1-4 simplified

Michigan Test • Chapter 1

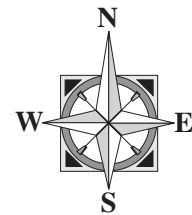
Name _____ Date _____

1. A state is made of three things.
Two are its people and its government.
The other is its _____
(sand, land, trees, seas)



2. A peninsula is land with water on _____ sides.
3. The name “Michigan” comes from Native American words.
These words mean _____ or _____ lake.
4. A road is a _____ characteristic. (human, natural)
5. A river is a _____ characteristic. (human, natural)

6. Which direction is Lake Michigan from Lansing?
It is _____.
(east, west, north, south)



7. There is a natural feature around Michigan. It can be seen from outer space. (Hint. They are wet.)
Name this feature. _____

8. Circle True or False.
The “common good” is thinking about what is best for only myself.



Name _____ Date _____

9. Circle True or False.

Michigan's rivers flow into the Great Lakes.




10. Circle True or False.

The Great Lakes do not affect Michigan's climate.

11. Circle True or False.

Sharing Great Lakes water is NOT a public issue.



12. Circle True or False.

A region is an area that **shares a common feature**.

13. The water in the Great Lakes is

(not salty, salty like the oceans, always warm)

14. A _____ helped form the Great Lakes.

It was made of ice.

(ice cube, comet, glacier)



15. _____ is the **COUNTRY** that

is north and east of Michigan. It is our neighbor.

(Canada, Mexico, Ohio, Europe)

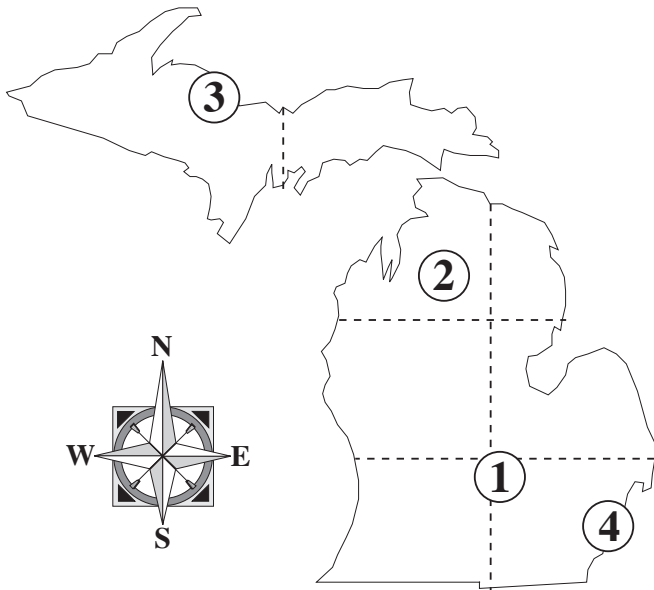


Name _____ Date _____

16. You want to divide Michigan into **2** regions.

One region could be the _____.

The other could be the _____.



Look at the map for these questions.

17. The state capital is number _____.



18. Detroit is our largest city. It is number _____.



19. This number is in the Upper Peninsula. _____

20. The map has 8 parts.

Mark an X in the part where the most people live. Keep your X in only one part.

